

## Homework 1. Due Tuesday, January 22

**Problem 1.** *Problem 5.13 from Classical Mechanics by J. R. Tylor*

The potential energy of a one-dimensional mass  $m$  at a distance  $r$  from origin is

$$U(r) = U_0 \left( \frac{r}{R} + \lambda^2 \frac{R}{r} \right)$$

for  $0 < r < \infty$ , with  $U_0$ ,  $R$ , and  $\lambda$  all positive constants.

1. Find the equilibrium position  $r_0$ .
2. Let  $x$  be the distance from equilibrium and show that, for small  $x$ , the potential energy has the form  $U = \text{const.} + \frac{1}{2}kx^2$ .
3. What is the angular frequency of the oscillations in terms of  $U_0$ ,  $R$ , and  $\lambda$ ?

**Problem 2.** *Problems 7.30 from Classical Mechanics by J. R. Tylor*

Consider a pendulum of length  $l$  suspended inside a railroad car that is being forced to accelerate with a constant acceleration  $a$ .

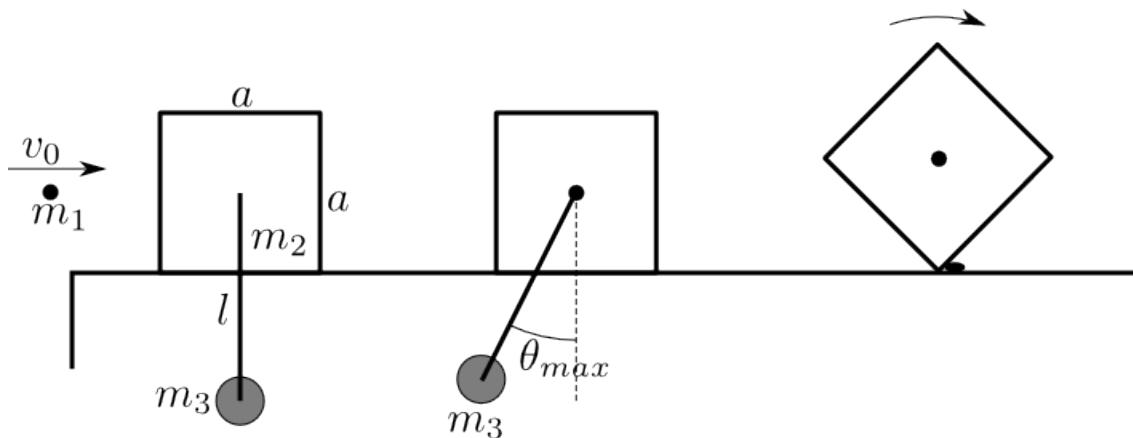
1. Write down the Lagrangian for the system and the equation of motion for the angle  $\phi$  — the angle between the pendulum and the vertical.
2. Find the equilibrium angle  $\phi_0$ .
3. Show, that the equilibrium is stable.
4. Find the angular frequency of the small oscillations around the equilibrium.

## Homework 2. Due Tuesday, January 29

### Problem 1. 1994-Spring-CM-U-1

A bullet of mass  $m$ , is fired with velocity  $v_0$  at a solid cube of side  $a$  on the frictionless table. The cube has mass of  $m_2$  and supports a pendulum of mass  $m_3$  and length  $l$ . The cube and pendulum are initially at rest. The bullet becomes embedded in the cube instantaneously after the collision.

1. If  $\theta_{max}$  is the maximum angle through which the pendulum swings, find the velocity  $v_0$  of the incident bullet.
2. When the pendulum's swing reaches the maximum angle, the pendulum's string is cut off. Therefore the solid cube slides and hits a small obstacle which stops the leading edge of the cube, forcing it to begin rotating about the edge. Find the minimum value of  $v_0$  such that the cube will flip over. Note that the moment of inertia of the cube about an axis along one of its edge is  $\frac{2}{3}Ma^2$ . Assume the bullet is a point located at the center of the cube.



### Problem 2. 2001-Spring-CM-U-3

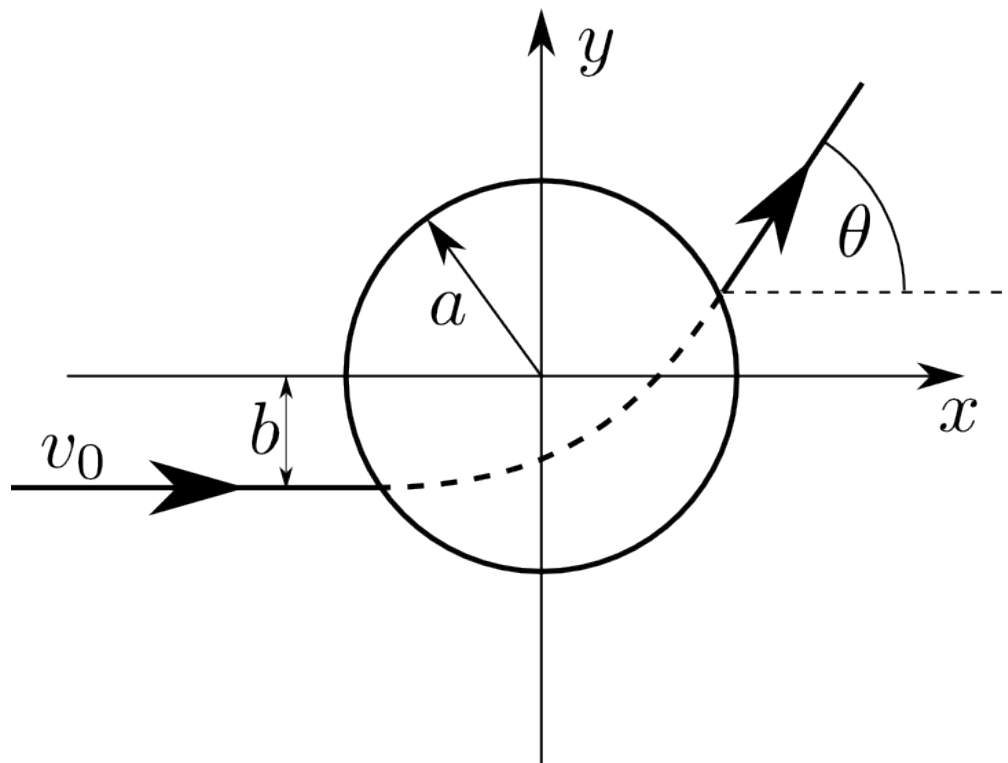
A particle with mass  $m$ , confined to a plane, is subject to a force field given by

$$\vec{F}(\vec{r}) = \begin{cases} -k\vec{r}, & \text{for } |r| \leq a \\ 0, & \text{for } |r| > a \end{cases}$$

The particle enters the field from the left horizontally with an initial velocity  $v_0$  and a distance  $b < a$  below the force center as shown.

1. Write down the equation of motion for  $r \leq a$  in Cartesian coordinates in terms of  $x$ ,  $y$ , and  $\omega = \sqrt{k/m}$
2. Give the trajectory of the particle when  $r < a$ .
3. For  $v_0 = a\omega$  find the coordinates of the particle as it exits the region of non-zero force field.

4. For  $v_0 = a\omega$ , find the deflection angle  $\theta$  of the departing velocity at the exit point.



## Homework 3. Due Tuesday, February 5

### Problem 1. 1989-Spring-CM-U-1.

A particle of mass  $m$  scatters off a second particle with mass  $M$  according to a potential

$$U(r) = \frac{\alpha}{r^2}, \quad \alpha > 0$$

Initially  $m$  has a velocity  $v_0$  and approaches  $M$  with an impact parameter  $b$ . Assume  $m \ll M$ , so that  $M$  can be considered to remain at rest during the collision.

1. Find the distance of closest approach of  $m$  to  $M$ .
2. Find the laboratory scattering angle. (Remember that  $M$  remains at rest.)

### Problem 2. 1998-Spring-CM-U-3

A particle of mass  $m$  has velocity  $v_0$  when it is far from the center of a potential of the form:

$$V(r) = \frac{k}{r^4},$$

where  $k$  is a positive constant that you can conveniently write as

$$k = \frac{1}{2}mv_0^2a^4.$$

1. Find  $r_{min}$  the distance of the closest approach of the particle to the center of force, as a function of the impact parameter  $b$  of the particle.
2. Find an expression for the scattering angle of the particle as a function of the impact parameter  $b$ . Your expression may include a definite integral that you need not evaluate, so long as no unknown quantities appear in the integral.



### For Honors.

### Problem 3. 1994-Fall-CM-G-3.jpg

A particle of mass  $m$  moves under the influence of an attractive central force  $F(r) = -k/r^3$ ,  $k > 0$ . Far from the center of force, the particle has a kinetic energy  $E$ .

1. Find the values of the impact parameter  $b$  for which the particle reaches  $r = 0$ .
2. Assume that the initial conditions are such that the particle misses  $r = 0$ . Solve for the scattering angle  $\theta_s$ , as a function of  $E$  and the impact parameter  $b$ .

## Homework 4. Due Tuesday, February 12

### Problem 1.

Determine the cross-section for a particle of energy  $E$  to “fall” to the center of a field (capture cross-section)  $U = -\frac{\alpha}{r^2}$ , where  $\alpha > 0$ .

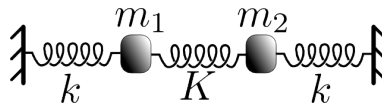
### Problem 2.

Determine the cross-section for a particle of energy  $E$  to “fall” to the center of a field (capture cross-section)  $U = -\frac{\alpha}{r^n}$ , where  $\alpha > 0$  and  $n > 2$ .

## Homework 5. Due Tuesday, February 19

### Problem 1. 1983-Fall-CM-U-2.

Take  $K = 4k$  and  $m_1 = m_2 = M$ . At  $t = 0$  both masses are at their equilibrium positions,  $m_1$  has a velocity  $\vec{v}_0$  to the right, and  $m_2$  is at rest. Determine the distance,  $x_1$ , of  $m_1$  from its equilibrium position at time  $t = \frac{\pi}{4}\sqrt{\frac{M}{k}}$ . Hint: First find the normal modes and the normal mode frequencies, then put in the initial conditions.



### Problem 2.

Determine the normal/eigen frequencies for the four equal masses  $m$  on a ring. The masses are connected by the identical springs of spring constant  $k$  along the ring.

### For Honors.

### Problem 3.

Determine the normal/eigen frequencies for two equal masses  $m$  on a ring of radius  $R$ . The masses are connected by the identical springs of spring constant  $k$  along the ring. The ring is in the vertical plane. The acceleration of the free fall is  $g$ . Consider only the case of hard springs:  $\frac{mg}{kR} \ll 1$ .

## Homework 6. Due Tuesday, February 26

### Problem 1. 1985-Fall-CM-U-2.

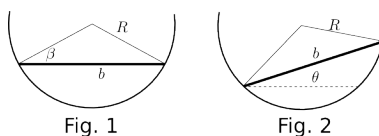
A straight rod of length  $b$  and weight  $W$  is composed of two pieces of equal length and cross section joined end-to-end. The densities of the two pieces are 9 and 1. The rod is placed in a smooth, fixed hemispherical bowl of radius  $R$ . ( $b < 2R$ ).

1. Find expression for the fixed angle  $\beta$  between the rod and the radius shown in Fig.1
2. Find the position of the center of mass when the rod is horizontal with its denser side on the left (Fig. 1). Give your answer as a distance from the left end.
3. Show that the angle  $\theta$  which the rod makes with the horizontal when it is in equilibrium (Fig. 2) satisfies

$$\tan \theta = \frac{2}{5} \frac{1}{\sqrt{(2R/b)^2 - 1}}$$

Note the fundamental principles you employ in this proof.

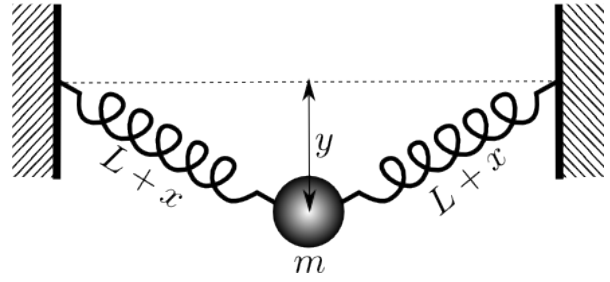
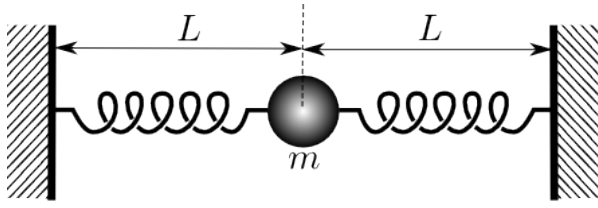
4. Show that the equilibrium is stable under small displacements.



### Problem 2. 1990-Fall-CM-U-1.

A small steel ball with mass  $m$  is originally held in place by hand and is connected to two identical horizontal springs fixed to walls as shown in the left figure. The two springs are **unstretched** with natural length  $L$  and spring constant  $k$ . If the ball is now let go, it will begin to drop and when it is at a distance  $y$  below its original position each spring will stretch by an amount  $x$  as shown in the right figure. It is observed that the amount of stretching  $x$  is very small in comparison to  $L$ .

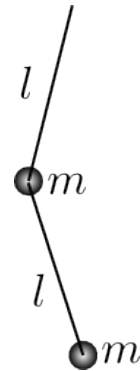
1. Write down the equation that determines  $y(t)$ . (Take  $y$  to be positive in going downward.) Is this simple harmonic motion?
2. Find the equilibrium position  $y_{\text{eq}}$  about which the steel ball will oscillate in terms of  $m$ ,  $g$ ,  $k$ , and  $L$ .
3. Find the maximum distance,  $y_{\text{max}}$ , that the steel ball can drop below its original position in terms of  $m$ ,  $g$ ,  $k$ , and  $L$ .
4. Write down an expression for the period of the steel ball's motion. (DO NOT evaluate the integral.)





# Homework 7. Due Tuesday, March 05

## Problem 1.

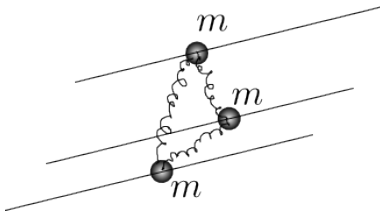


Find normal frequencies and normal modes of a double pendulum.

## Problem 2.

Three infinite horizontal rails are at distance  $l$  from each other. Three beads of equal masses  $m$  can slide along the rails without friction. The three beads are connected by identical springs of constants  $k$  and equilibrium/unstretched length  $l/2$ .

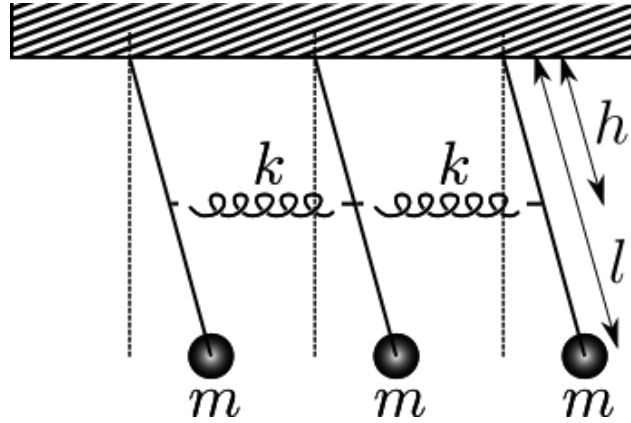
1. Find the normal modes and the normal frequencies.
2. At time  $t = 0$  one of the masses is suddenly given a velocity  $v_0$ . Find how the velocities of all three masses will depend on time. Find how the sum of the three velocities depends on time. Why?



# Homework 8. Due Tuesday, March 19

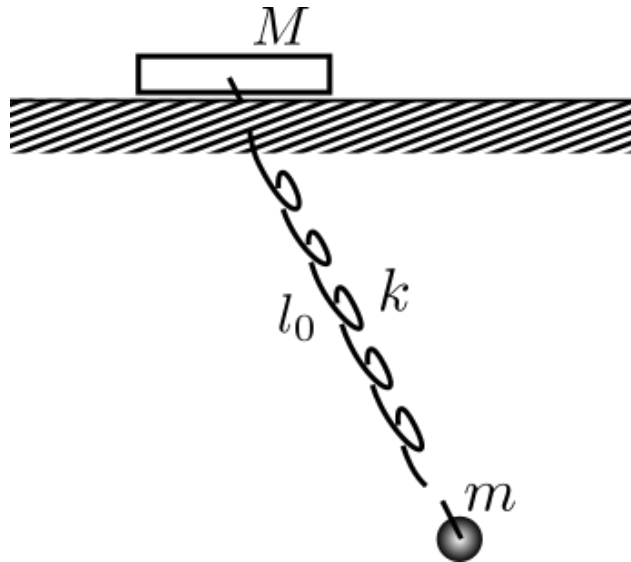
**Problem 1.** *Three pendulums*

Three identical pendulums are connected by the springs as shown on the figure. Find the normal modes



**Problem 2.** *A pendulum a spring and a block*

A ball of mass  $m$  is hanging on a weightless spring of spring constant  $k$ , which is attached to a block of mass  $M$ . The block can move along the table without friction. The length of the unstretched spring is  $l_0$ . Find the normal modes of small oscillations.



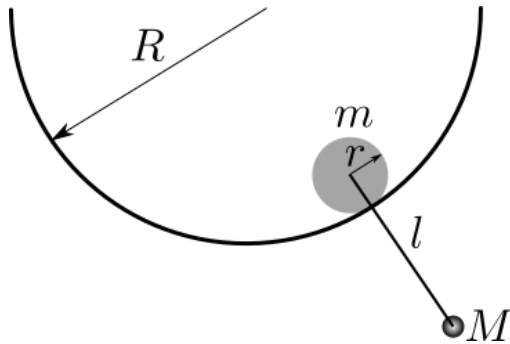
**Problem 3.** *One ring to rule them all.*

$N$  identical beads (mass  $m$ ) can move along the ring of radius  $R$ . Each bead is connected to the one behind it and to the one in front of it by a spring of constant  $k$ . Find all normal frequencies.

## Homework 9. Due Tuesday, March 26

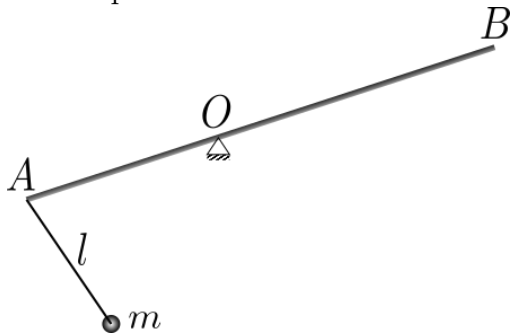
### Problem 1. *Cylinders and a pendulum*

A uniform solid cylinder of radius  $r$  and mass  $m$  can roll inside a hollow cylinder of radius  $R > r$  without slipping. A pendulum of length  $l = \frac{R-r}{2}$  and mass  $M = m/2$  is attached to the center of the smaller cylinder. Find the normal frequencies and normal modes of this system.



### Problem 2. *A rod and a pendulum*

A uniform rod  $AB$  of mass  $M$  and length  $3a$  can rotate around a point  $O$ ,  $|AO| = a$ . A pendulum of length  $l = a$  and mass  $m = \frac{3}{4}M$  is attached to the end  $A$  of the rod. Find the normal frequencies and normal modes.



## Homework 10. Due Tuesday, April 2

### Problem 1.

1. Find the principal moments of inertia for a uniform square of mass  $M$  and side  $a$ .
2. Find the kinetic energy of the uniform cube of mass  $M$  and side  $a$  rotating with angular velocity  $\Omega$  around its large diagonal.

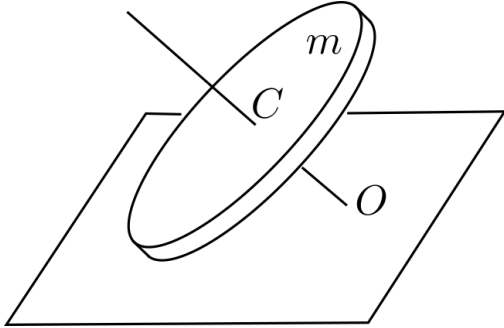
### Problem 2.

1. Find the kinetic energy of the uniform circular cone of height  $h$ , base radius  $R$ , and mass  $M$ . Rotating with the angular velocity  $\vec{\Omega}$ .
2. The same for a uniform ellipsoid of semiaxes  $a$ ,  $b$ , and  $c$ .

## Homework 11. Due Tuesday, April 9

### Problem 1. *A coin*

A uniform thin disc of mass  $m$  rolls without slipping on a horizontal plane. The disc makes an angle  $\alpha$  with the plane, the center of the disc  $C$  moves around the horizontal circle with a constant speed  $v$ . The axis of symmetry of the disc  $CO$  intersects the horizontal plane in the point  $O$ . The point  $O$  is stationary. Find the kinetic energy of the disc.



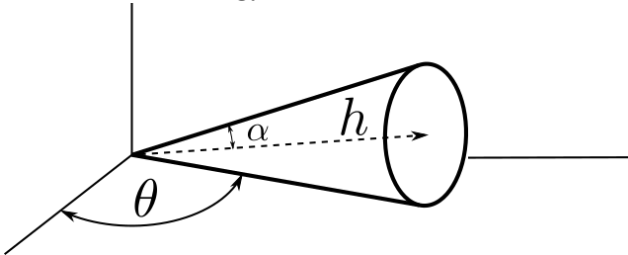
### Problem 2.

Ignoring interaction between the Earth and both the Moon and the Sun, find the precession angular velocity of the Earth. Consider Earth to be a uniform spheroid with semiaxes  $C$  and  $A$  and  $\frac{C-A}{A} \approx \frac{1}{300}$ .

**For Honors.**

### Problem 3.

A cylindrical cone of mass  $M$ , height  $h$ , and angle  $\alpha$  is rolling on the plane without slipping. Find its kinetic energy as a function of  $\theta$ .



## Homework 12. Due Tuesday, April 16

### Problem 1. *A Rectangular Parallelepiped*

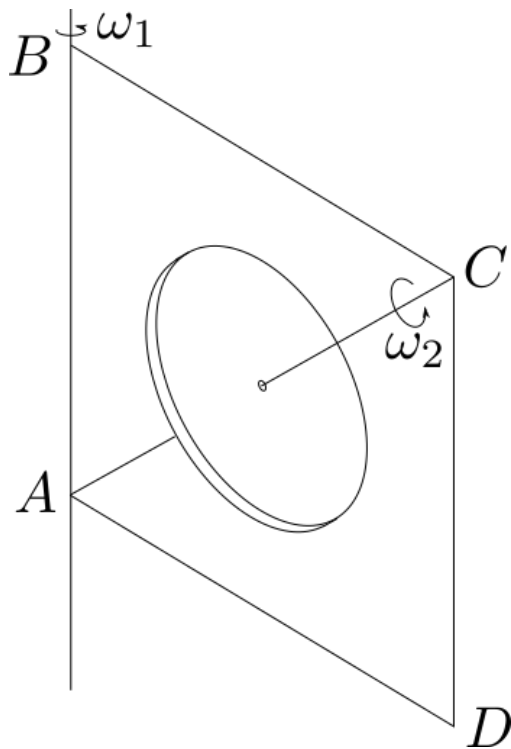
A uniform Rectangular Parallelepiped of mass  $m$  and edges  $a$ ,  $b$ , and  $c$  is rotating with the constant angular velocity  $\omega$  around an axis which coincides with the parallelepiped's large diagonal.

1. What is the parallelepiped's kinetic energy?
2. What torque must be applied to the axis of rotation in order to keep the axis(!) still? (neglect the gravity.)

### Problem 2. *A disk in a frame*

A square weightless frame  $ABCD$  with the side  $a$  is rotating around the side  $AB$  with the constant angular velocity  $\omega_1$ . A uniform disk of radius  $R$  and mass  $m$  is rotating around the frame's diagonal  $AC$  with the constant angular velocity  $\omega_2$ . The center of the disk coincides with the center of the frame. Assuming  $\omega_1 = \omega_2 = \omega$  find

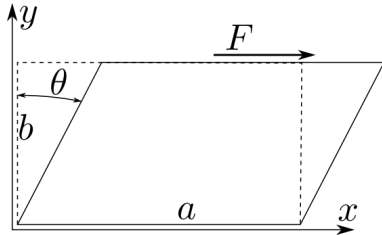
1. The kinetic energy of the system.
2. The magnitude of the torque that needs to be applied to the axis  $AB$  to keep it (the axis  $AB$ ) still. (neglect the gravity.)



## Homework 13. Due Tuesday, April 23

### Problem 1.

A parallelepiped with edges  $a$ ,  $b$ ,  $c$  was deformed as shown on the figure. Find the strain tensor in the linear approximation assuming that  $\theta$  is small. Remember, the answer must be a  $3 \times 3$  tensor.



### Problem 2.

For the deformation from the previous problem assuming that the shear modulus is  $\mu$  find:

1. The stress tensor.
2. The force  $F$  which has to be applied to the top surface.
3. Total torque of all external forces.
4. Are you sure your answer for the previous question is correct?
5. How come the parallelepiped is not rotating then?

### Problem 3.

A cylinder of radius  $R$  and length  $L$  is squeezed by applying a uniform pressure  $P_0$  to its end.

1. Find the change of length.
2. Find the change of the radius.

Express your results through Young's modulus  $E$  and Poisson ratio  $\sigma$  of the cylinder.

### Problem 4.

A cylinder of radius  $R$  and length  $L$  is placed inside a very hard tube of the inner radius  $R$  and then squeezed by applying a uniform pressure  $P_0$  to its end.

1. Find the change of length.
2. Find the pressure  $P$  the cylinder exerts on the tube.
3. What is the maximum possible  $P$  at given  $P_0$ ?
4. What is the minimal possible  $P$  at given  $P_0$ ? Hint: it's negative.

Express your results through Young's modulus  $E$  and Poisson ratio  $\sigma$  of the cylinder.